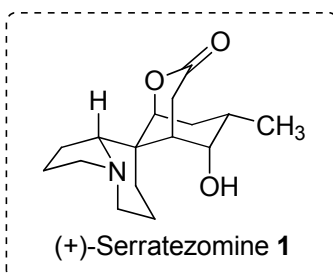


## The Total Synthesis of (+)-Serratezomine A

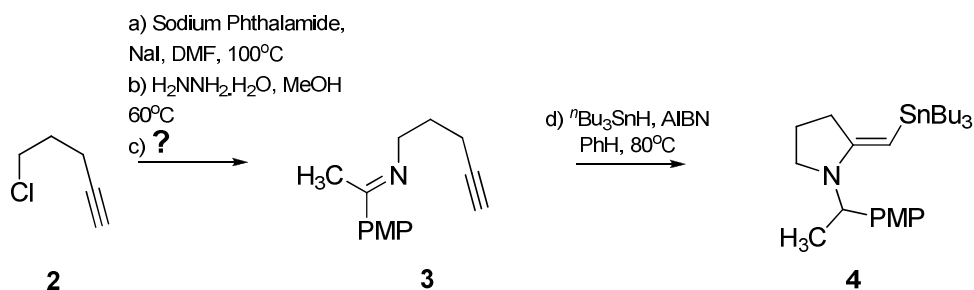
A member of the *Lycopodium* class of alkaloids, (+)-Serratezomine A was isolated by Kobayashi and co-workers in 2000 from the club moss *L. serratum*. Its total enantioselective synthesis has recently been achieved by the group of Jeffery Johnston at Vanderbilt University, Nashville, Tennessee.



The longest linear sequence is 15 steps and the synthesis features an in-house developed free-radical-mediated vinyl amination as a key step. The chirality is introduced in an early alkylation step and the remainder of the synthesis is completed with a high level of stereocontrol.

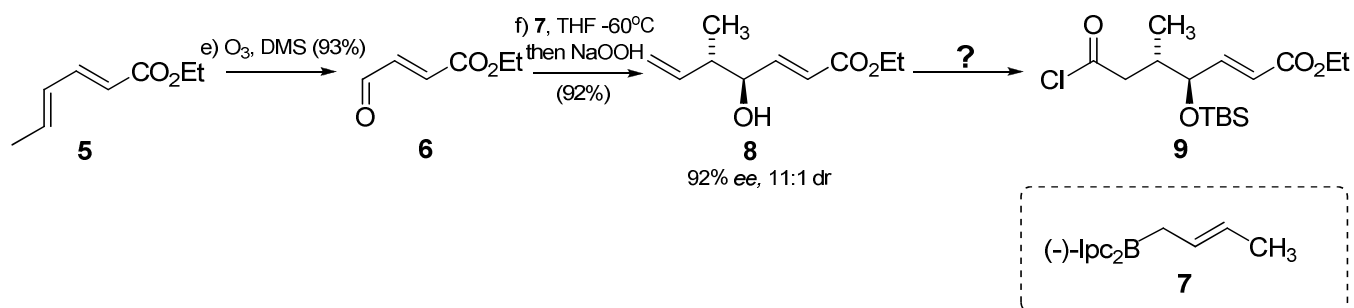
### Questions

Scheme 1 shows the preparation of the vinyl stannane **4**, the substrate for the aforementioned free-radical-mediated vinyl amination.



Scheme 1

1. Give mechanisms for steps a and b and provide suitable conditions for step c.
2. Provide a mechanism for step d.

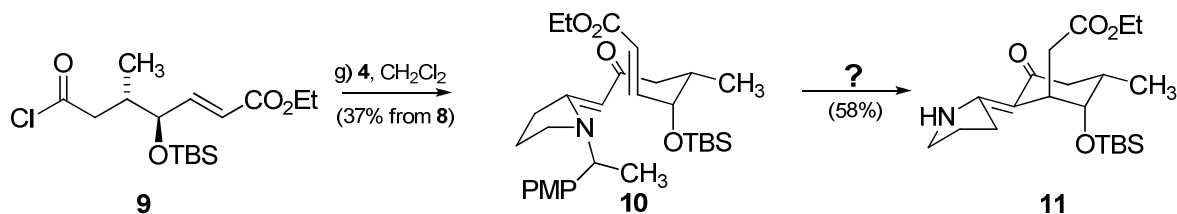


Scheme 2

3. Ozonolysis of ethyl sorbate provides the aldehyde **6**. Why is the reaction selective for the terminal alkene?

4. An asymmetric alkylation of **6** with Brown's crotonylation reagent **7** gave allylic alcohol **8** with high enantio- and diastereoselectivity. Account for the diastereoselectivity.

5. Suggest a sensible synthetic sequence to go from **8** to **9**.

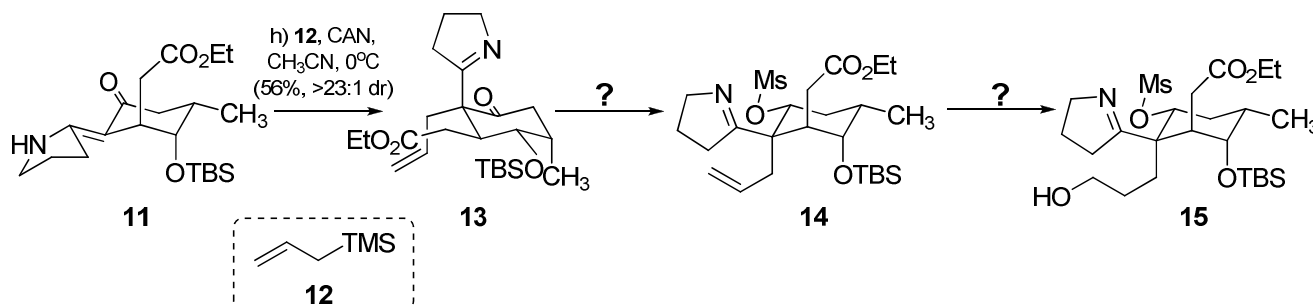


Scheme 3

6. Suggest conditions for the dealkylation of the pyrrolidine nitrogen in **10**.

7. The cyclohexanone **11** was formed selectively upon dealkylation of nitrogen. Can you suggest why?

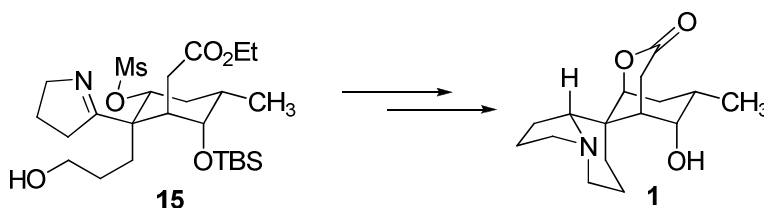
8. There are other isomers that could potentially arise from the ring-closing event. Draw as many as you can. How could you distinguish between them?



Scheme 4

9. The oxidative allylation of **11** with allyltrimethylsilane installs the final three carbon atoms of the skeleton. Can you propose a mechanism?

10. With all the carbon atoms now present, only a few simple bond formation steps are required to furnish the natural product. Propose a synthetic sequence from ester **13** to the target using the intermediates **14** and **15** to guide you.



Scheme 5

